

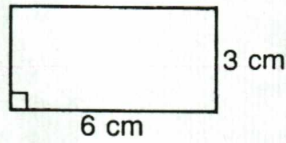
Area of a Rectangle and a Parallelogram

name _____

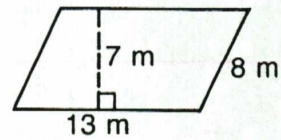
Find the area of each polygon.

Do 2-12 evens

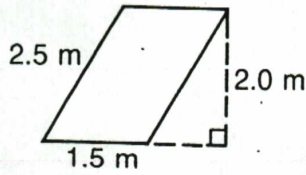
1. _____



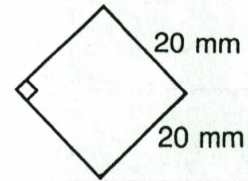
2. _____



3. _____

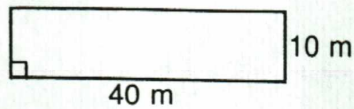


4. _____

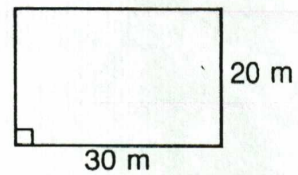


Will gardens having the same perimeter have the same area? Find the area of each garden below.

5. _____

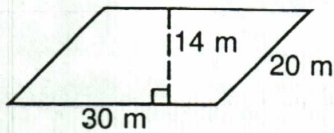


6. _____




Scott, Foresman Mathematics Practice Book © Scott, Foresman and Company

7. _____



8. _____



9. Find the area of a square garden, 25 m on a side. _____

10. Find the area of a garden, 49 m by 1 m. _____

11. Find the area of a square table, 120 cm by 120 cm. _____

12. Find the area of a square carpet, 2.7 m on a side. _____